



Favourite Colours



Let us Do

Look at the picture. Complete the table and fill in the blanks.

Colours	Red	Green	Blue	Yellow
Number of Children				

- The most liked colour is _____.
- The least liked colour is _____.
- Yellow colour is liked more than _____.
- _____ colour is liked more than green.
- _____ colour is liked less than _____.





Picnic Day

Children are having a fruit party. They are eating their favourite fruits.



Let us Do


Complete the table and fill in the blanks.






Fruits				
Number of Children				

- How many children are there in the picture? _____.
- Number of children who like apples is _____.
- Most liked fruit is _____.
- Least liked fruit is _____.
- Number of children who like guava is _____
(more than/less than/equal to) the number of children who like apple.
- The number of children who like apple is _____
(more than/less than/equal to) the number of children who like banana.
- The number of children who like orange _____
(more than/less than/equal to) the number of children who like kiwi.



Discuss the picture and fill up the table.



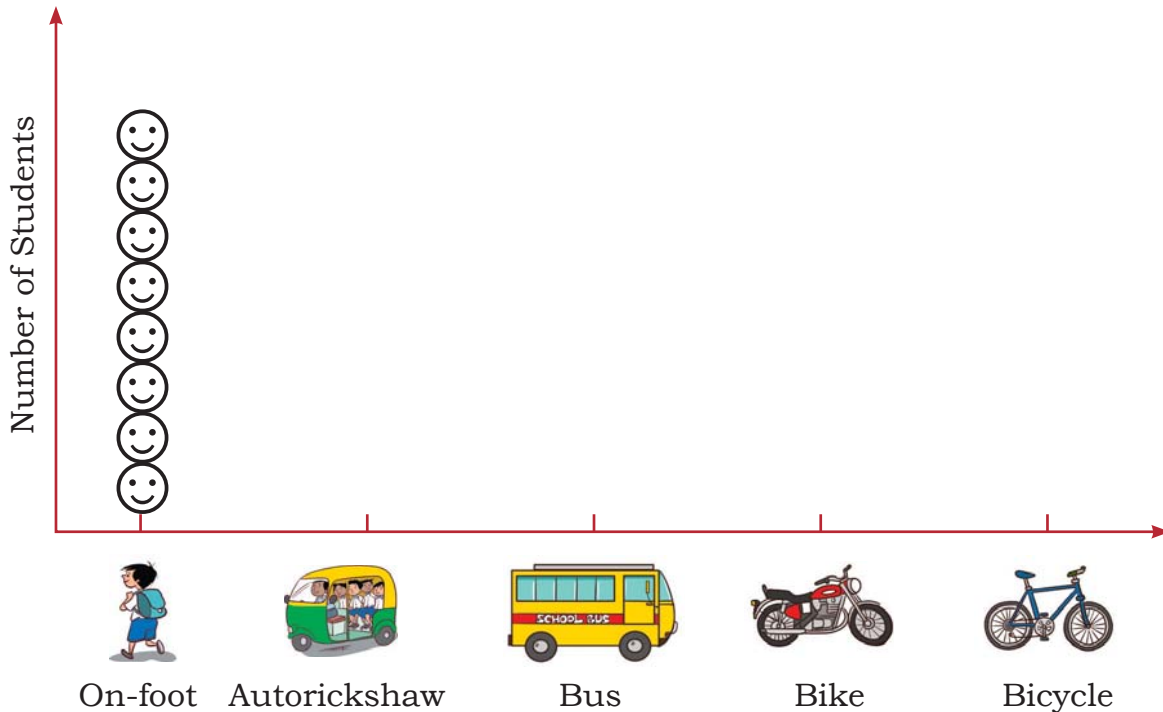
Mode of coming to school	Number of students
	8
	
	
	
	



125

Read the table and draw faces (😊) in the chart given below to show the number of students coming to school by different modes. (😊 = 1 student)

Look at the chart and fill in the blanks.



- Maximum number of students come to school by _____.
- Least number of students come to school by _____.
- The number of students who come to school using bus is _____ (less/more) than the number of students who come using autorickshaw.
- The number of students who come to school using bike is _____ (more/less) than the number of students who come using bicycle.
- The number of students who come to school using _____ is less than the number of students who come using _____.
- The number of students who come to school using _____ is more than the number of students who come using _____.








Games we Play



Let us Do

Look at the picture and fill up the table.

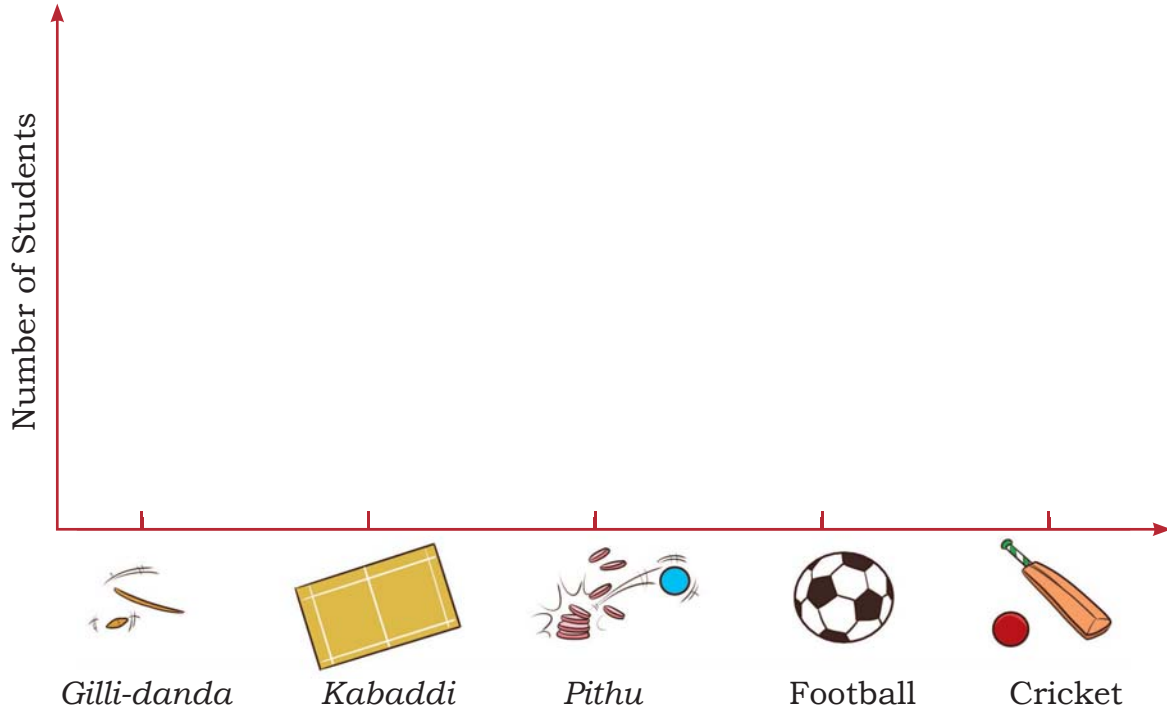
Games	Number of Students
	
	
	
	
	



127



Use the table to draw faces (😊) to show the number of students in the chart below.



- A. The most liked game is _____.
- B. The least liked game is _____.
- C. *Pithu* is liked more than _____.
- D. _____ is liked more than football.



Let us Do

A. Discuss in your class and ask your friends about the vegetables they like the most. Complete the table.

Vegetable they like				
Number of children				



B. Read the table and fill in the blanks.

- Most liked vegetable is _____.
- Least liked vegetable is _____.
- _____ is liked more than _____.
- _____ is liked less than _____.

C. Ask your friends about the number of family members living in their homes. Fill in the table given below.

- Most families have _____ people in their homes.
- The least number of people living in a home is _____.
- The number of families having 4 people is _____.
- The number of families having more than 4 people is _____.

Number of people living together	How many families
1 People	
2 People	
3 People	
4 People	
5 People	



Project Work

Visit nearby families to find out the number of families which have their grandparents living with them. Record the information to fill in the table.

Families living with	Both grandparents	Only female grandparents	Only male grandparents	No grandparents
Number of Families				

How many families did you visit? _____

Number of families living with both grandparents _____

How many families live with one grandparent? _____

How many families live without grandparents? _____

Before visiting the families, discuss the questions you are going to ask them in the class.



129

